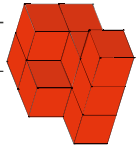
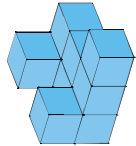


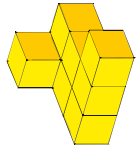
1 Welcher Bauplan passt zum Gebäude? Male in derselben Farbe an.



1	1	1
2	2	1
1	2	1



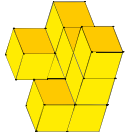
1	1	1
1	1	1
2	1	2




1	1	1
1	1	1
1	1	2

2 Welches Gebäude passt zum Bauplan? Kreuze an.

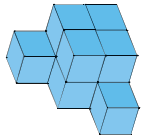
1		
1	1	1
2	1	2




3	2	1
2	1	



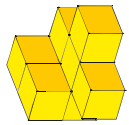
3	2	1
2	1	



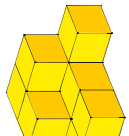
3	2	1
2	1	



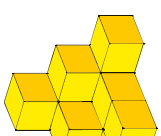
3 Wie sieht der Bauplan zum Gebäude aus?



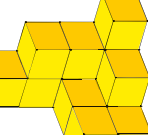
2	1	
2	1	1
1	1	



2	2	1
2	1	
1	1	

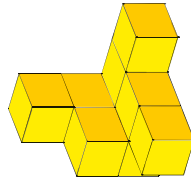


3	2	1
2	1	
1	1	

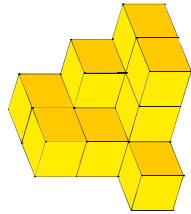


4	3	1
2	1	
2		

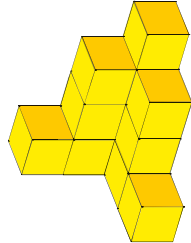
4 Finde die Fehler im Bauplan. Schreibe den Bauplan neu.



2	3	
1	1	2
1	1	1



1	3	3
2	2	
1	1	1



1	2	3
1	2	
1	2	

5 Zeichne Baupläne. Achte auf die Bedingung.

Das Gebäude hat einen Turm mit 4 Würfeln.

1	2	1
2	4	2
1	2	1

Das Gebäude besteht aus 12 Würfeln.


1	1	1
1	1	2
1	2	2

Das Gebäude hat eine Treppe.

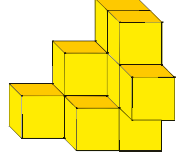
3	3	3
2	2	2
1	1	1

Das Gebäude ist ein Brunnen.

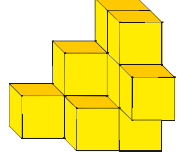
4	4	4
4	4	4
4	4	4

z.B. 

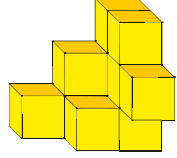
6 Zeichne 4 Ansichten.



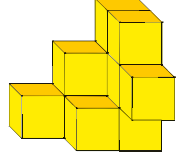
vorn



hinten



rechts



links