



Rückwärts über den Zehner 5



$13 - 7 = \underline{\quad}$




$13 - 3 = \underline{10}$

$\underline{10} - 4 = 6$

$14 - 8 = \underline{\quad}$



$15 - 7 = \underline{\quad}$



$13 - 5 = \underline{\quad}$




$12 - 4 = \underline{\quad}$



$11 - 7 = \underline{\quad}$



$16 - 9 = \underline{\quad}$



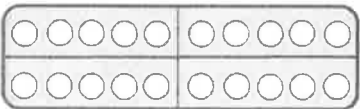
$14 - 6 = \underline{\quad}$



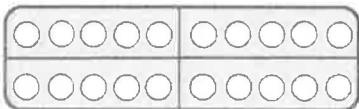
$12 - 3 = \underline{\quad}$



$13 - 8 = \underline{\quad}$



$15 - 9 = \underline{\quad}$



$12 - 9 = \underline{\quad}$



$11 - 6 = \underline{\quad}$



$20 - 14 = \underline{\quad}$



$15 - 6 = \underline{\quad}$