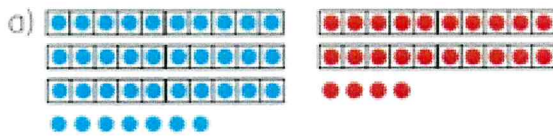
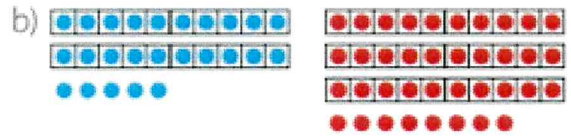


Plusaufgaben mit Zehnerüberschreitung

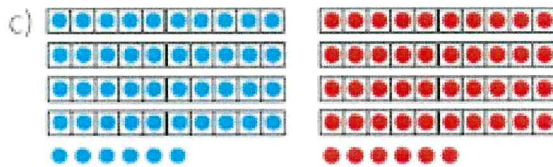
1 Schreibe Plusaufgaben und löse.



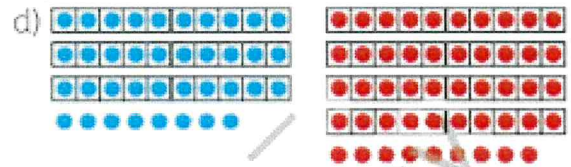
$$37 + 24 = 61$$



$$25 + 38 = 63$$



$$46 + 46 = 92$$



$$38 + 49 = 87$$

2 Wie rechnest du? Notiere deinen Rechenweg.

$$43 + 28$$

$$65 + 29$$

$$16 + 47$$

$43 + 28 = 71$	$65 + 29 = 94$	$16 + 47 = 63$
$43 + 20 = 63$	$60 + 20 = 80$	$16 + 40 = 56$
$63 + 8 = 71$	$5 + 9 = 14$	$56 + 7 = 63$

3	$28 + 14 = 42$	$26 + 26 = 52$	$46 + 19 = 65$	$47 + 48 = 95$
	$17 + 25 = 42$	$39 + 17 = 56$	$29 + 38 = 67$	$67 + 18 = 85$
	$27 + 19 = 46$	$18 + 38 = 56$	$37 + 26 = 63$	$74 + 19 = 93$
	$29 + 17 = 46$	$29 + 25 = 54$	$15 + 48 = 63$	$59 + 26 = 85$
	$44 + 16 = 60$	$52 + 17 = 69$	$63 + 17 = 80$	$87 + 15 = 102$

